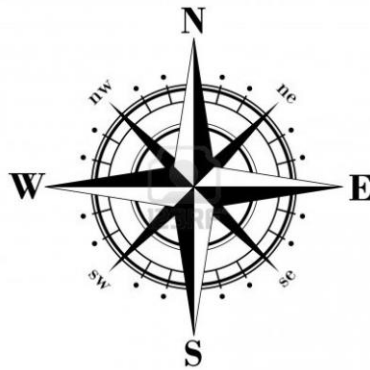



1. The arrow is facing South and is moved a three-quarter turn anti-clockwise. Which direction is it pointing now?



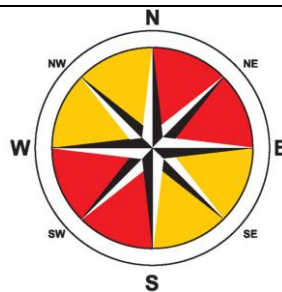
2. The arrow is facing North- West and is moved half a turn clockwise. Which direction is it pointing now?



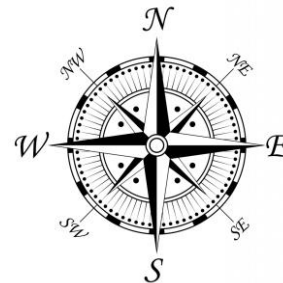
3. The arrow is facing South-West and is moved a quarter turn anti-clockwise. Which direction is it pointing now?



4. The arrow is facing North-East and is moved a two-quarter turn clockwise. Which direction is it pointing now?



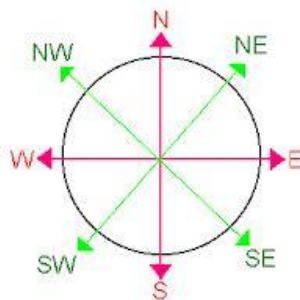
5. The arrow is facing South-East and is moved a three-quarter turn clockwise. Which direction is it pointing now?



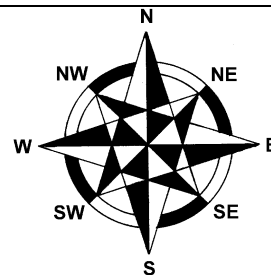
6. The arrow is facing North and is moved a three-quarter turn anti-clockwise. Which direction is it pointing now?



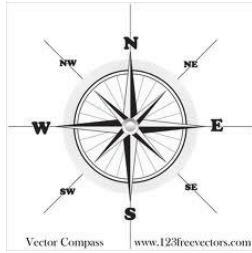
7. The arrow is facing North-West and is moved a quarter turn anti- clockwise. Which direction is it pointing now?



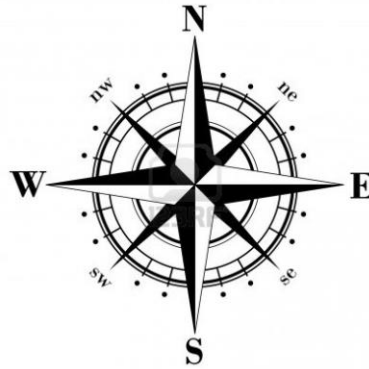
8. The arrow is facing South-East and is moved a half turn clockwise. Which direction is it pointing now?



9. The arrow is facing West and is moved a quarter turn clockwise. Which direction is it pointing now?




10. The arrow is facing East and is moved a three-quarter turn clockwise. Which direction is it pointing now?



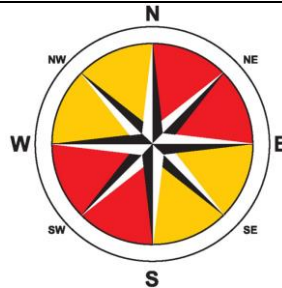
11. The arrow is facing North and is moved three-quarter turn anti-clockwise. Which direction is it pointing now?



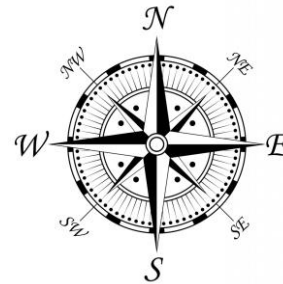
12. The arrow is facing West and is moved a half turn clockwise. Which direction is it pointing now?



13. The arrow is facing East and is moved a three-quarter turn anti-clockwise. Which direction is it pointing now?



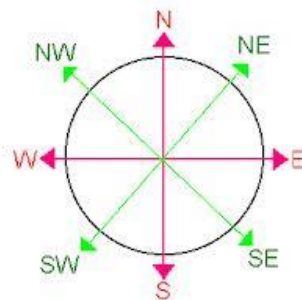
14. The arrow is facing South and is moved a quarter turn anti-clockwise. Which direction is it pointing now?



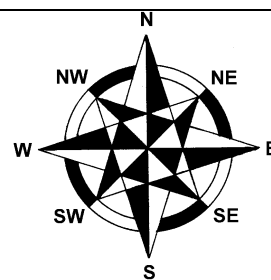
15. The arrow is facing North-East is moved a half turn clockwise. Which direction is it pointing now?



16. The arrow is facing North and is moved a three-quarter turn clockwise. Which direction is it pointing now?



17. The arrow is facing South and is moved a quarter turn anti-clockwise. Which direction is it pointing now?



18. The arrow is facing North-West and is moved a half turn clockwise. Which direction is it pointing now?

Answer sheet

1. West
2. South-East
3. South-East
4. South-West
5. North-East
6. East
7. South-West
8. North-West
9. North
10. North
11. East
12. East
13. South
14. East
15. South-West
16. West
17. East
18. North-East