

## Ashfield Junior School

### Year 3 Home Learning Tasks Summer Term Week 3

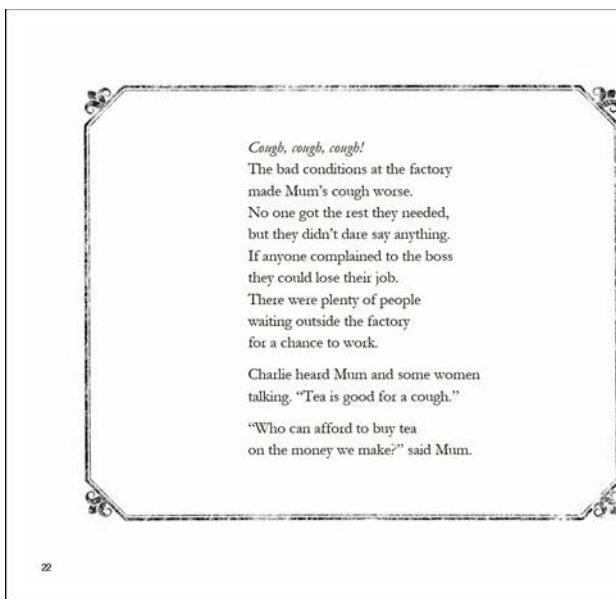

Wednesday 29<sup>th</sup> April

#### English

Daily Practice:

Spellingframe

Topmarks: English KS2 Look cover write check:



#### Grammar

Can you remember what an adverb is? See if you can explain it to someone at home.

Look at the paragraph below and see if you can decide where you could include adverbs to make the writing more interesting for the reader. If it helps, highlight or underline the verbs. Try experimenting with where you place the adverb in your sentence.

Here are some suggestions of adverbs you might like to use. To make it harder you could think of some different examples of your own. You might also want to change some punctuation to make sure the writing still makes sense.

**closely, quickly, regretfully, steadily, slowly, anxiously, sadly, gently, slowly, carefully, quietly,**

Early the next morning, Charlie walked to the mill with his mother. The sky was grey and dark and Charlie was worried about his mother. A group of women huddled together on the cobbles greeted them and asked after Mother's cough "Is it no better lass?" one of the women asked. Mother shook her head. "It's keeping me awake at night and I don't know what to do" she replied.

"They say tea is good for a cough. Have you tried that?" the woman suggested.

"Who can afford to but tea with the money we make?" said mum. Charlie and his mum smiled and said goodbye to the women. They did not want to be late for work so hurried off to the mill gates. The smoke rose from the tall chimneys and the whirring and clanking of the machinery continued to echo around reminding them of their day ahead. Charlie thought "What could he do to find some tea for mum?"

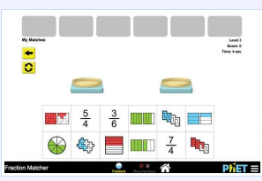
**Challenge:** What happens while Charlie is at work? Continue the piece of writing about Charlie's day. It doesn't have to be a long piece of writing, aim for around 10 sentences. Can you include some different adverbs?

## Maths

### Daily Practice:

### TTrockstars

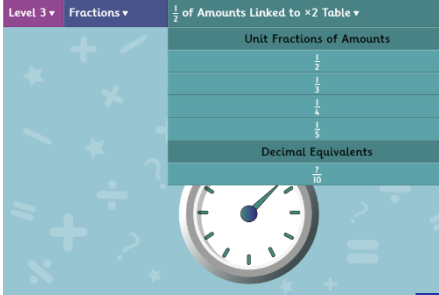
### Topmarks: 7-11 years Fraction Matcher & Daily 10: Level 3 Fractions



**Fraction Matcher**

An excellent fractions matching game at different levels of difficulty making it very versatile in use. There is an option to play the games against the clock and also with mixed whole numbers and fractions. Highly recommended.

**Tablet-friendly**



Level 3 ▾ Fractions ▾  $\frac{1}{2}$  of Amounts Linked to  $\times 2$  Table ▾

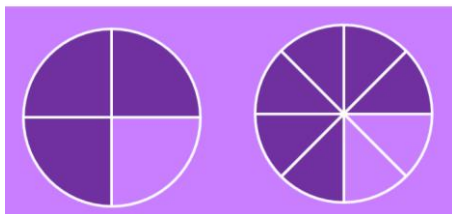
Unit Fractions of Amounts

$\frac{1}{2}$
$\frac{1}{3}$
$\frac{1}{4}$
$\frac{1}{5}$
$\frac{1}{6}$
$\frac{1}{8}$

Decimal Equivalents

$\frac{1}{10}$
----------------

### Equivalent Fractions




Some fractions that are written with different numbers have the same value.

In other words, a fraction can be written in many different ways, but have the same value.



$$\frac{1}{2}$$



$$\frac{2}{4}$$

## Equivalent Fractions

These are all equivalent fractions, even though they all have different numerators and denominators.

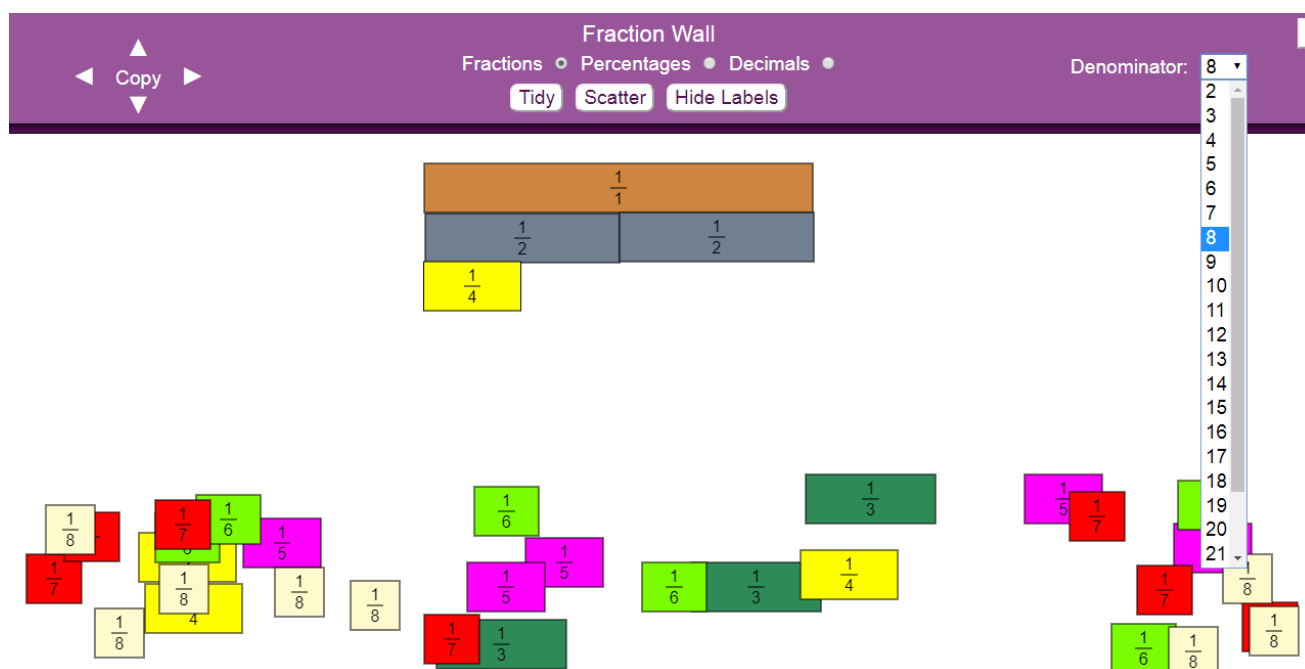
They show that the same amount of the bar has been shaded overall.



Use the link below to access this interactive Fraction Wall. You can change the denominator by clicking on the down arrow. Start with eighths. You will need to click on the tab **‘Scatter’**

Now you are ready to build your Fraction Wall.

- Find the whole 1 click and drag into position
- Then find the halves and place them under the whole 1
- Use the example below to build your wall.





<https://mathsbot.com/manipulatives/fractionWall>


Using your Fraction Wall, can you find which fraction is equivalent to  $\frac{3}{4}$

**Equivalent Fractions**

Which group shows an equivalent fraction to  $\frac{3}{4}$  ?



  
 $\frac{6}{8}$

  
 $\frac{5}{8}$

1. How many different ways can you find of writing  $\frac{1}{2}$ ?
2. What equivalent fractions for  $\frac{1}{3}$  can you find?
3. What equivalent fraction can you find for  $\frac{1}{4}$ ?

### Daily Reasoning and Problem Solving

#### 'Problem of the Day Challenge'

Which is the odd one out? Explain why



## Topic

# Thomas Barnardo

Continue your research biography on Dr Barnardo

<https://www.bbc.co.uk/teach/class-clips-video/true-stories-thomas-barnardo/zky7pg8>

## Somethings to think about:

Why was Dr Barnardo famous?

Early life of Dr Barnardo

Important work

Later years of his life