


Wednesday 29<sup>th</sup> April

Work for Year 4

Please spend time doing these tasks this morning – English, Maths and Geography

There is also a suggested timetable on our Year 4 page.

English:





Exploring a character

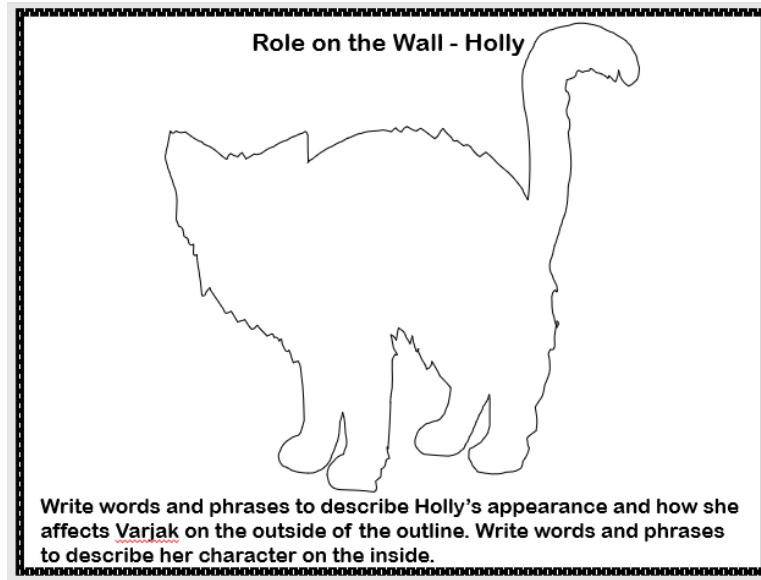
Remember to look at chapter 9 to help you and to watch the clip of Mrs Hicklin reading it too.

The new character of Holly, the black and white cat, is introduced. How does she react to finding Varjak in the shed? Find evidence in chapter 9 of what she says and does, then complete a table like the one below. Some examples have been done for you.

The character of Holly – how the author builds it up	
What Holly says	What she does
<i>Don't move a muscle. If you don't put those claws away, I'll rip you to shreds.</i>	<i>A low growl ripped the air. gravelly voice</i>

  
  
What is the character saying, thinking and feeling?

Extension Task:



---

Remember to read your book for 15 minutes today.

**Maths:** As a warm up today, try 10 minutes on **TT Rockstars** <https://trockstars.com>  
- we can see that some of you are rock Stars and Rock Legends, some are New Artists! Try to beat your previous score!

Now watch this video for the maths tasks today.

<https://player.vimeo.com/video/405804568>

Open the activity sheets in another tab because you'll be asked to do questions and pause the video.

Try these activity sheets while you watch the video: write your answers in your homework book. (you don't have to print these out, not everyone has a printer.)

# Pounds and pence

1 How much money is there?



p



£

What is the same and what is different?



a) Complete the statements.

There is  pounds.

There is  pence.

There is £  and  p.

There is £

b) Draw money so that there are fewer coins but the same total amount.

3 Match the amounts that are equal.

Fill in the missing digits.

460p	£__ and __p	£4.62
420p	£4 and 62p	£4.06
__p	£4 and 6p	£4.20
462p	£4 and 20p	£__
426p	£4 and 26p	£4.60

4 Match the person to the correct amount.



I have a note and some coins.

Ron



I have more than Ron.

Rosie



I have the most money.

Jack



- 5 Amir has a note in his pocket.  
Annie has three coins in her pocket.



Amir must have more money than Annie.

Do you agree with Dora? \_\_\_\_\_  
Explain your answer.

\_\_\_\_\_

\_\_\_\_\_

- 6 Kim has four coins.
- The coins add to a multiple of 10
  - The total amount is more than £1
  - All the coins are silver.
  - The total is less than £1.50

a) Which four coins could Kim have?

\_\_\_\_\_

b) How many different combinations can you find?

- 7 Mo has this money.



Decide whether Mo's statements are true (T) or false (F).  
Circle your answer and give a reason for your choice.

a) You can make an amount greater than £11. T F

\_\_\_\_\_

b) You can make exactly £1.50 using three coins. T F

\_\_\_\_\_

c) You can make exactly £2.02 using four coins. T F

\_\_\_\_\_

d) You can make exactly £6.11. T F

\_\_\_\_\_

Here are the answers – try to complete the video and activity sheet before you look at them!

<https://wrm-13b48.kxcdn.com/wp-content/uploads/2020/homelearning/year-4/Lesson-3-Y4-Summer-Block-2-ANS1-Pounds-and-pence-2020.pdf>

## Geography

### Our new topic is Mega Cities.

Open the PowerPoint 2 - Where are Mega Cities? on the website and look at each slide. There are maps to help you.

What do you notice about where the Mega Cities are in the world?

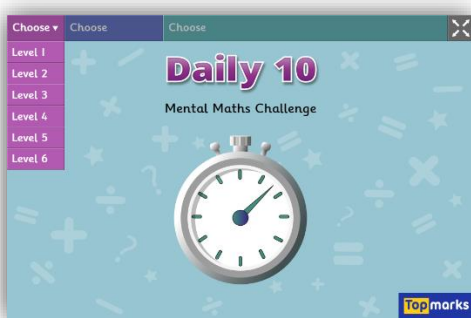
Have fun exploring the world from home!

You could look at these websites for more fun learning during the week!

<https://www.bbc.co.uk/teach/super movers> - you know the times tables ones, have a go at the others if you like!



<https://www.topmarks.co.uk/maths-games/daily10> - mental maths that you set your level.



<https://www.topmarks.co.uk/maths-games/hit-the-button> - a quick fire mental maths game.



[https://www.youtube.com/user/thebodycoach1?fbclid=IwAR0iaRPq65aXPUBDdwgl2JbbhR3bsL6oTAgSzuAJYhaco6QMui-3u\\_60a8](https://www.youtube.com/user/thebodycoach1?fbclid=IwAR0iaRPq65aXPUBDdwgl2JbbhR3bsL6oTAgSzuAJYhaco6QMui-3u_60a8) – Joe Wicks is doing a FREE PE lesson every day at 9am – so keep your body fit as well as your mind!



<https://www.glasgowsciencecentre.org/gsc-at-home> - Glasgow Science Centre will be live every day at 10am! Expand your mind!!

