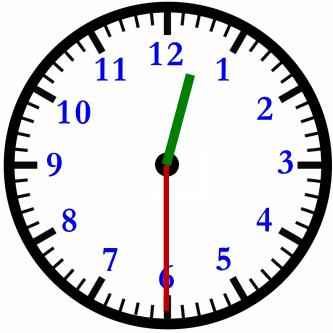


Name : _____

Score : _____

Teacher : _____

Date : _____



Clock A

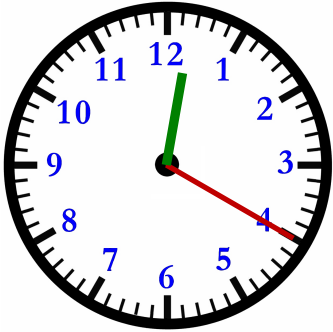


Clock B

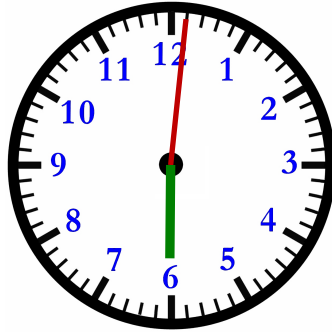
What time is on Clock A ? _____

What time is on Clock B ? _____

How much time has elapsed
between Clock A and B ? _____



Clock A

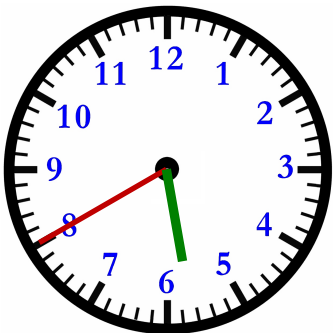


Clock B

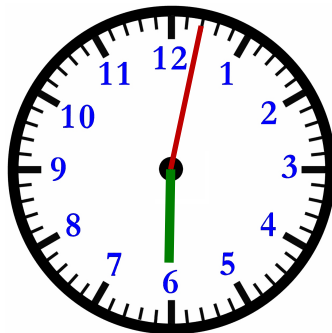
What time is on Clock A ? _____

What time is on Clock B ? _____

How much time has elapsed
between Clock A and B ? _____



Clock A

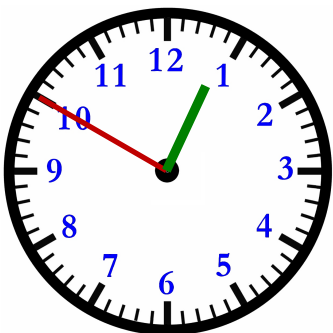


Clock B

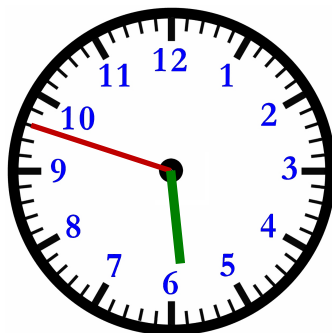
What time is on Clock A ? _____

What time is on Clock B ? _____

How much time has elapsed
between Clock A and B ? _____



Clock A



Clock B

What time is on Clock A ? _____

What time is on Clock B ? _____

How much time has elapsed
between Clock A and B ? _____

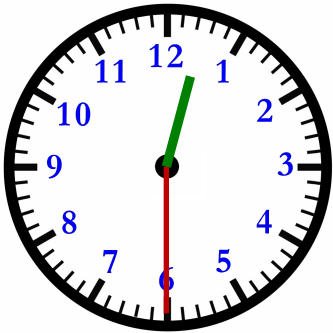


Name : _____

Score : _____

Teacher : _____

Date : _____



Clock A

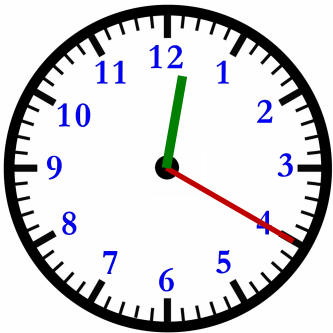


Clock B

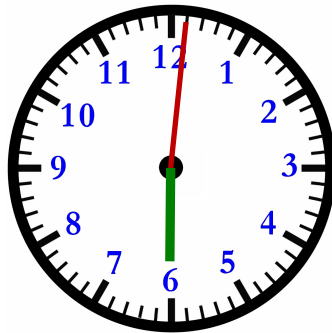
What time is on Clock A ? 12:30

What time is on Clock B ? 4:32

How much time has elapsed
between Clock A and B ? 4 hrs and 2 mins



Clock A

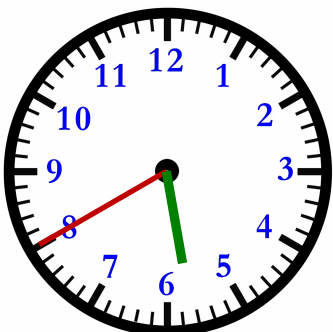


Clock B

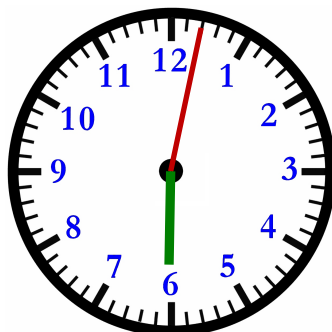
What time is on Clock A ? 12:20

What time is on Clock B ? 6:01

How much time has elapsed
between Clock A and B ? 5 hrs and 41 mins



Clock A

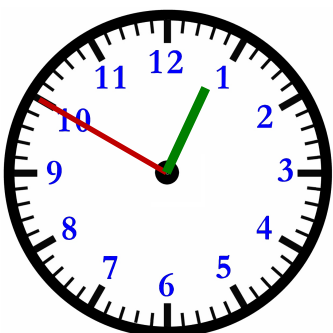


Clock B

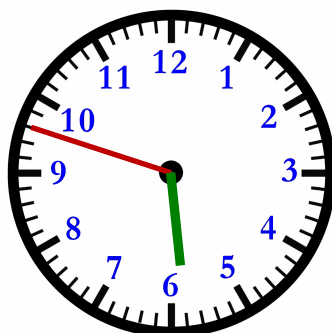
What time is on Clock A ? 5:40

What time is on Clock B ? 6:02

How much time has elapsed
between Clock A and B ? 0 hrs and 22 mins



Clock A



Clock B

What time is on Clock A ? 12:50

What time is on Clock B ? 5:48

How much time has elapsed
between Clock A and B ? 4 hrs and 58 mins

