



5B Home Learning – Monday 8th June

- A chameleon's tongue is at least as long as its body, but it can grab prey in a fraction of a second.
- An eagle's eyes are at least four times sharper than a human's.
- The lion has the loudest roar of all the big cats. It can be heard as far as 5km (3 miles) away.

ENGLISH

1. Use the website <https://www.topmarks.co.uk/Search.aspx?q=prefixes> and select the second activity in the list: Prefixes and Suffixes. Can you choose the correct prefixes and suffixes to make new words?
2. Think about all the strategies you used last week to 'uplevel' the sentences: fronted adverbials, expanded noun phrases, adjectives and relative clauses. Look back at your writing about the discovery (writing task on Monday 1st June) and choose some sentences to 'uplevel' using the strategies you practised.

MATHS

Calculate:

- | | |
|----------------------------|------------------------------|
| 5. $8 \times 8 =$ _____ | 11. $27 \div 3 =$ _____ |
| 6. $12 \times 6 =$ _____ | 12. $36 \div 6 =$ _____ |
| 7. $4 \times 6 =$ _____ | 13. $48 \div 6 =$ _____ |
| 8. $11 \times 7 =$ _____ | 14. $24 \div 3 =$ _____ |
| 9. $6 \times 10 =$ _____ | 15. $500 \div 10 =$ _____ |
| 10. $30 \times 10 =$ _____ | 16. $6000 \div 1000 =$ _____ |

Complete these calculations

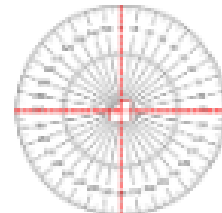
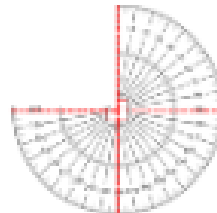


17. $8 \times$ _____ $= 56$ 18. $40 \div$ _____ $= 8$

19. A party bag has 12 sweets in. 7 children are each given a party bag. How many sweets are given out in total?

20. Stickers are sold in packs of 28. There is room for 4 stickers on each page. How many pages can be filled with one pack of stickers?

2. Watch the Espresso video from Friday again to remind yourself how to find the measurements of unknown angles.

Complete the sentences.



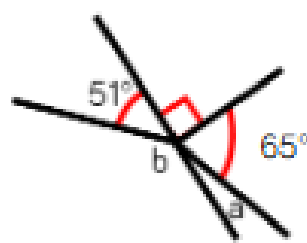
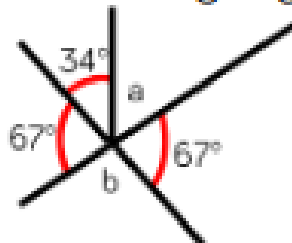
$\frac{1}{4}$ of a turn = 1 right angle = 90°

$\frac{1}{2}$ of a turn = __ right angles = _____ $^\circ$

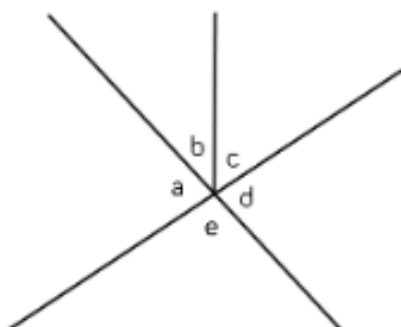
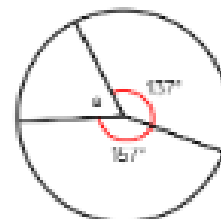
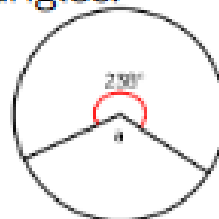
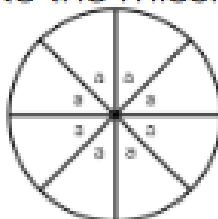
of a turn = 3 right angles = _____ $^\circ$

A full turn = __ right angles = _____ $^\circ$

Calculate the missing angles.



Calculate the missing angles.



$$a + b + c + d + e = 360^\circ$$

$$d + e = 180^\circ$$

Write other sentences about this picture.

HISTORY Ancient Greeks: theatre

The Ancient Greeks loved going to the theatre – there were no televisions, tablets, devices, radios, cinemas, etc.

Their theatres were outside.

1) Type into Google 'Ancient Greek theatres' and take a look at *Images*.

Sophocles (Sof-o-klees), Euripedes (You-rip-ee-dees) and Aeschylus (Ee-skee-lus) were the top three playwrights of the fifth century BC (500BC) and all three were Athenians (they lived in the city-state of Athens). They were especially famous for writing tragedies.

There were only three actors performing a play and then there was the chorus. Today we are concentrating on the actors. So, if there were only three actors, how did they perform plays with more than three characters?

2) You don't need to read the whole of the webpage, but take a look at the video:

<https://www.bbc.co.uk/bitesize/topics/z87tn39/articles/zgpdjxs>

So the actors wore masks to show they were performing as a different character and to show different emotions and to make it easier for the audience who were high up and far away from the stage to see what was going on. The masks had large holes in the mouth so that the sound of their voices could travel across the theatre.

3) Type into Google 'Ancient Greek theatre masks' and take a look at *Images*.

4) **Task:** make **two** Ancient Greek masks to portray two different emotions, e.g. anger and joy; fun and tragedy.

a) Take a look at this: <https://www.youtube.com/watch?v=tR9I6pE09Qc> ...and have a go.

b) Using curled paper, threads of wool or similar materials, stick hair or beards to your mask.

c) Remember to cut out a large mouth, so your voice can be heard.

As usual, I'd love to see what you have created. Send a photo or two to me on Class Dojo or email me at rbishop@ashfield-jun.cumbria.sch.uk

*****Optional***** Sophocles wrote a very famous play called Antigone (An-tig-oh-nee). If you'd like to know more about it, watch this animation: https://www.youtube.com/watch?v=Lak0_1Hqwc

Easiest Question In The World: was Antigone a tragedy or a comedy?