

Tuesday 30th June

Work for Year 4

English

Linked to our science topic of living things and their habitats, this week we ask you to log onto <https://www.studyladder.co.uk> and complete a non-fiction reading comprehension that has been set for you.

You will find 4 new reading comprehension tasks when you log on, these are for today, yesterday and Wednesday.

Complete the Reptiles task today. You need to read the text and answer the questions on the site.

Tomorrow complete the next one.

We'll be able to see your results on the website.

(If you've lost your log in details, please message us on dojo and we'll send them to you.)

Maths:

As a warm up today, do try 10 minutes on TT Rockstars, www.timestables.me.uk and Prodigy.

We are learning about money this week.

Click this link to watch the video. Open the questions in another tab because you'll need to stop the video and answer questions as you go.

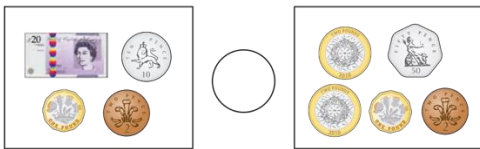
<https://player.vimeo.com/video/430337688>

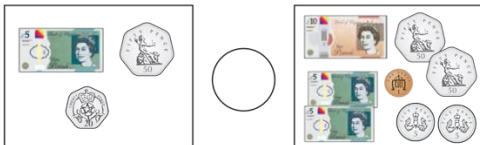
Ordering money

1 What is the value of the digit 2 in these amounts?

- a) 524p _____
- b) £24 and 50p _____
- c) £54.02 _____
- d) 5,240p _____
- e) £42.54 _____
- f) 2,544p _____

2 Write <, > or = to compare each pair of amounts.

a) 

b) 

c) How did you compare the amounts?

4 Write <, > or = to compare the amounts.

- a) 743p 734p
- b) £37.40 £37.04
- c) £3.74 734p
- d) £40.07 4,003p
- e) 4,037p £40.37
- f) 7,304p £73.40

5 a) Write the amounts in ascending order.

270p 2,007p 2,700p 720p 7,020p

b) Write the amounts in descending order.

£4.65 £46.50 £6.45 £45.60 £46.05

c) Write the amounts in ascending order.

£21.89 1,289p 8,291p £82.19 9,128p

d) Write the amounts in descending order.

£5.05 550p 5,500p £50.50 £55.05

3 Draw three coins in each box to make the statements correct.


£26.70

<




£26.70

>



£26.70

=



Is there more than one way to make each statement correct?

6 Huan has three different silver coins in his hand.

What amounts could he have?
Write them in ascending order.

7 Teddy has £6.55 and Annie has 673p.

Dexter has more money than Teddy, but less than Annie.

I only have one copper coin.

Dexter



a) How much money could Dexter have? £

b) What different amounts can you find?

8 What could the missing amount of money be?

369p < £ . < £16.63

Use the digit cards to complete the inequality.

1 3 6 9 0

Use each digit card once only.

You do not need to use every card.

Compare answers with a partner. How many different answers can you find?

The Lake District

We live right next to The Lake District. Click on this page to learn about what The Lake District is and what there is to do there.

<https://www.bbc.co.uk/bitesize/articles/zd49ydm>

Now make a poster to persuade tourists to visit the area. What can they see? What can they do? How should they treat the environment with respect when they visit?

Coronavirus explained and a science experiment!

Here is a cool video to help you understand about what the coronavirus is and why we need to wash our hands so much.

<https://www.nanogirllive.co.nz/coronavirus-soap-experiment>