








Match the tiles with the same value. Write down each pair and cross them off as you go.

6	half of 8	half of 18	5
half of 6	half of 12	4	2
half of 14	half of 10	9	7
half of 16	8	half of 4	3

Now match these tiles in pairs. Remember, the top number (numerator) means how many are shaded, and the bottom number (the denominator) means how many pieces there are in total.

$\frac{1}{5}$		$\frac{1}{4}$	
		$\frac{2}{3}$	$\frac{1}{10}$
$\frac{2}{5}$	$\frac{3}{4}$		$\frac{1}{3}$
		$\frac{1}{2}$	