

26/02/21

Hi, this is your home learning work for today. Make sure you have somewhere quiet to do your work and that you send us photos on Dojo of your tasks.

English, maths, Enquiry & Investigation and Creative

English:

Spelling/ handwriting – Lesson 2

Watch Mrs James' video here –


<https://www.loom.com/share/38c76b3774b24f40a004f7e4834a7358>

When you have finished watching the video, make sure you complete the tasks set:

1. Draw a table with 2 columns – one for 'inter' and one for 'anti' and place the given words/ groups of letters under the correct prefix.
2. Find the definition of 3 or 4 words that you don't understand once the prefix has been added.

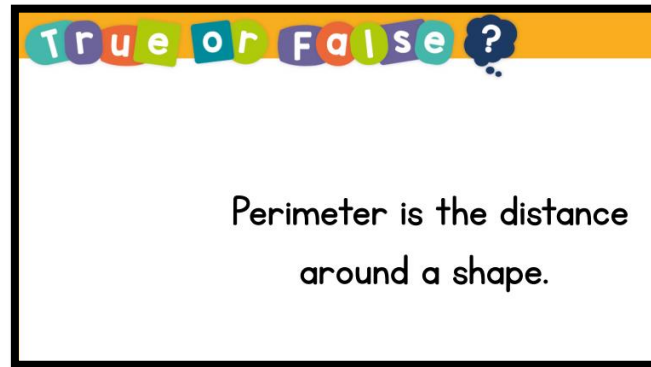
When you have finished you can go on Spelling Frame and practice words with our new spelling pattern on rule 5.

Don't forget to read for 10 minutes with an adult – try to do this every day!



Maths: Measure perimeter

Task 1. True or false?



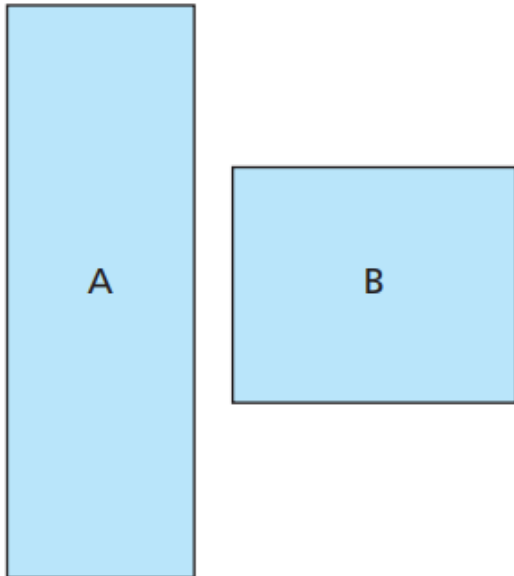
Task 2: Watch this video carefully: <https://vimeo.com/507043505>

Task 3: answer these questions

Measure perimeter



1 Here are two rectangles.



Use a piece of wool to measure the perimeter of each rectangle.
How much wool did you need for each one?
Give units with your answer.

A = B =

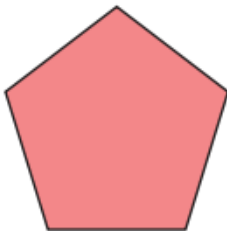
4 Measure the perimeter of each shape.

a)




perimeter =

b)

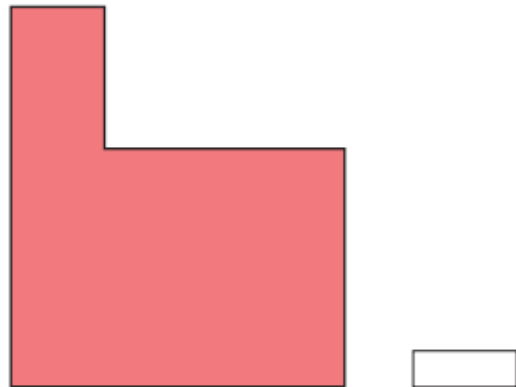


perimeter =

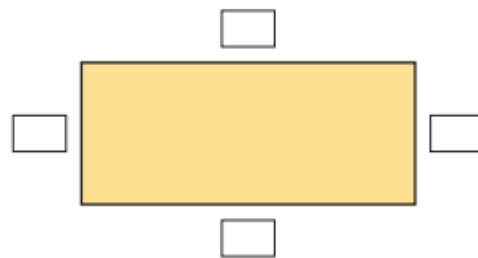
5 Draw a triangle with a perimeter of 15 cm.



2 Use a piece of wool to measure the perimeter of the hexagon.
How much wool did you need? Give units with your answer.



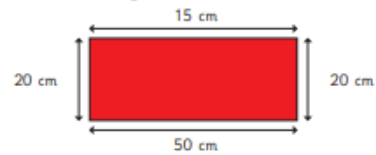
3 a) Measure each side of the rectangle and label it.



b) What is the perimeter of the rectangle?

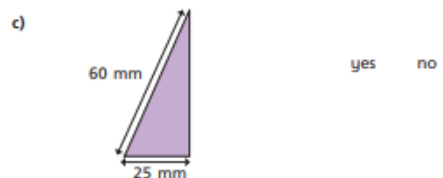
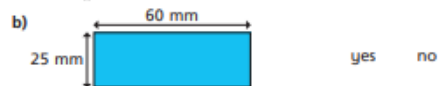
© White Rose Maths 2019

6 Aisha is working out the perimeter of a rectangle.
She measures the length of all 4 sides and labels the rectangle.



How do you know that Aisha's measurements are wrong?

7 Is it possible to work out the perimeter of each shape?
Circle your answer.



How do you know whether you can or cannot find the perimeter of each shape?

Talk about it with a partner.

© White Rose Maths 2019

French

Watch Mrs James' video here introducing today's lesson:

<https://www.loom.com/share/9d6ab00219974c1a83297e54c83460b3>

Task

- Write the question – 'Quelle est la date de ton anniversaire' and ask all the people you can (in your household or on the phone to others)

- Record each person's date of birth in French.

(Example – Mrs James - L'anniversaire de Madame James est vingt-sept Octobre.

- Design a birthday card with the greeting – 'Joyeux Anniversaire' which means 'Happy Birthday' in French.
-