

Geography

NAME



Geography

Locational Knowledge

1. What district do you live in?

.....

2. Name three lakes in England.

.....

.....

.....

.....

2. What is Lake Windermere?

.....

.....

3. Where is the River Severn?

.....

.....

4. What countries make up UK?

1.

2.

3.

4.

5. What is the capital of the England?

.....

6. Name 7 cities in the UK

1.

2.

3.

4.

5.

6.

7.

Geography

7.Name the seven continents of the world.

.....

.....

.....

.....

.....

.....

.....

8.Name the 5 oceans of the world:

.....

.....

.....

.....

.....

9.Name 7 seas of the world:

.....

.....




.....

.....

.....

.....

.....

10.	What are the names of these countries?	What is the name of the capital city?
		
		
		

Geography

Human and Physical Geography

1. Draw and label the Water Cycle.



2. What is Evaporation?

.....

.....

3. What is Condensation?

.....

.....

4. How are clouds formed?

.....

.....

5. Which of these is NOT a part of the water cycle?

The Sun evaporates water on the Earth's surface into water vapour	
The water vapour rises, and cools and condenses into clouds	
When it rains, the clouds melt	

Geography

6. Research the meaning of *physical geography*.

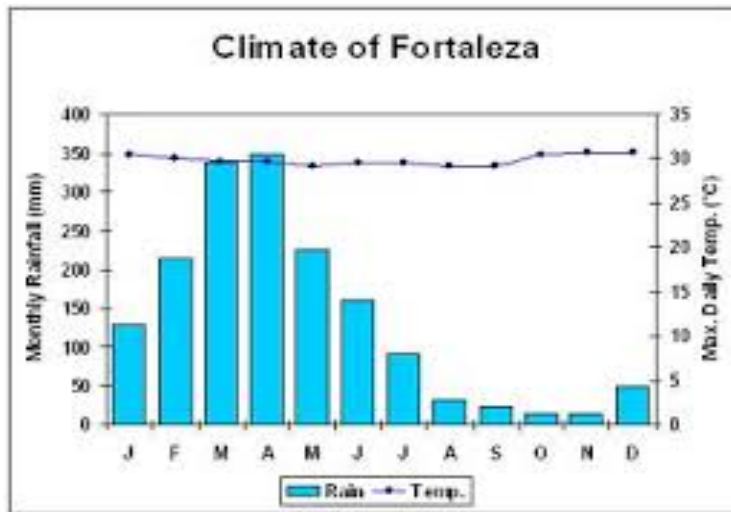
7. Research the meaning of *human geography*

8. Look at the pictures and say if they are Physical Geography or Human Geography.

Geography

9. Look at this climate graph of Brazil.



a) How many mm of rain is there in January?

.....

b) What is the temperature in July?

.....

10. What is a drought?

.....
.....
.....

11. Which region of the world has the most droughts?

.....

12. What is water aid?

.....
.....

13. How do you think we can improve the way people are living in some regions of the world where water is limited? Explain Fully.

.....
.....
.....
.....
.....
.....